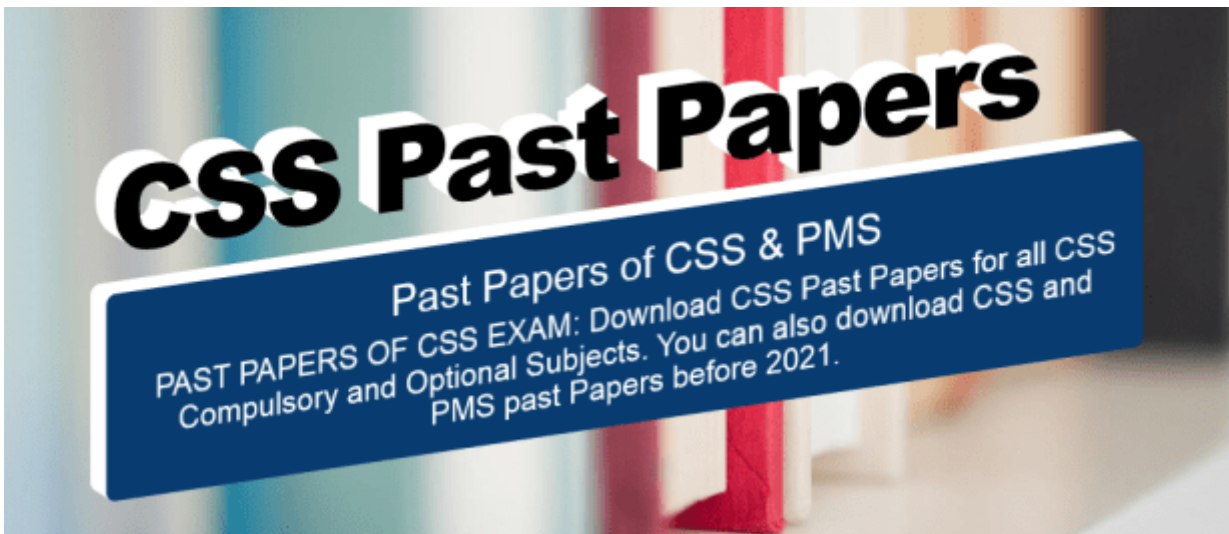

[CSS Past Papers 2021 | Download in PDF now](#)

Here, you can Download **CSS Past Papers 2021** for all CSS Compulsory at this page and Optional Subjects in other pages of CSSMCQs.com. All group wise css past papers and css subject wise past papers 2021 are available here for free download, download css exam past papers in pdf form 2021. You can also download CSS and PMS past Papers before 2021.

Download CSS Past Papers in pdf



PAST PAPERS OF CSS EXAM Download CSS Past Papers in pdf

CSS Subjects Compulsory and Optional Past Papers

CSS English Essay 2021 Past Paper

This is CSS English Essay 2021 Past Paper. This English Essay CSS Past paper of 2021 was conducted by FPSC.



FEDERAL PUBLIC SERVICE COMMISSION
COMPETITIVE EXAMINATION – 2021
FOR RECRUITMENT TO POSTS IN BS-17
UNDER THE FEDERAL GOVERNMENT

Roll No.

ESSAY

TIME ALLOWED: THREE HOURS

MAXIMUM MARKS: 100

NOTE:(i) Make an outline and write a **COMPREHENSIVE ESSAY** (2500-3000 words) on any **ONE** of the given topics. Make sure you use different forms of discourses, e.g. exposition, argumentation, description and narration. Credit will be given for organization, relevance and clarity.
(ii) No Page/Space be left blank between the answer. All the blank pages of Answer Book must be crossed.

1. "Do not waste water even if you were at a running stream".
2. Meaning purposive education.
3. COVID-19: A wake up call for Pakistani researchers.
4. Human inventions move the societies backward.
5. Universal human equality is utopic.
6. Bureaucracy doldrums.
7. Gender equality: A popular slogan.
8. Pros and cons of globalization.
9. Intercultural communication is panacea to avoid 3rd world war.
10. "I fall upon the thorns of life! I bleed".



CSS English 2021 Precis and Composition Past Paper

This is CSS English 2021 Precis and Composition Past Paper. This English precis Past paper of 2021 was conducted by FPSC.

ENGLISH (PRECIS & COMPOSITION)

| | | |
|---|----------------------|---------------------------|
| TIME ALLOWED: THREE HOURS | PART-I (MCQS) | MAXIMUM MARKS = 20 |
| PART-II (MCQS): MAXIMUM 30 MINUTES | PART-II | MAXIMUM MARKS = 80 |

- NOTE:** (i) Part-II is to be attempted on the separate Answer Book.
(ii) Attempt ALL questions from PART-II.
(iii) All the parts (if any) of each Question must be attempted at one place instead of at different places.
(iv) Write Q. No. in the Answer Book in accordance with Q. No. in the Q. Paper.
(v) No Page/Space be left blank between the answers. All the blank pages of Answer Book must be crossed.
(vi) Extra attempt of any question or any part of the question will not be considered.

PART-II

Q. 2. Write a précis of the following and suggest a suitable title: (20)

Nizar Hassan was born in 1960 and raised in the village of Mashhad, near Nazareth, where he has lived with his family. He studied anthropology at Haifa University and after graduating worked in TV. Starting in 1990, he turned to cinema. In 1994, he produced *Independence*, in which he pokes his Palestinian interlocutors about what they think of the bizarre Israeli notion of their "independence". They have stolen another people's homeland and call the act "independence"! Hassan dwells on that absurdity.

As the world's attention was captured by the news of Israel planning to "annex" yet a bit more of Palestine and add it to what they have already stolen, I received an email from Nizar Hassan, the pre-eminent Palestinian documentary filmmaker. He wrote to me about his latest film, *My Grandfather's Path*, and included a link to the director's cut. It was a blessing. They say choose your enemies carefully for you would end up like them. The same goes for those opposing Zionist settler colonialists. If you are too incensed and angered by their daily dose of claptrap, the vulgarity of their armed robbery of Palestine, you would soon become like them and forget yourself and what beautiful ideas, ideals, and aspirations once animated your highest dreams. Never fall into that trap. For decades, aspects of Palestinian and world cinema, art, poetry, fiction, and drama have done for me precisely that: saved me from that trap. They have constantly reminded me what all our politics are about – a moment of poetic salvation from it all.

Nizar Hassan's new documentary is one such work – in a moment of dejection over Israel's encroachment on Palestinian rights and the world's complicity, it has put Palestine in perspective. The film is mercifully long, beautifully paced and patient, a masterfully crafted work of art – a Palestinian's epic ode to his homeland. A shorter version of *My Grandfather's Path* has been broadcast on Al Jazeera Arabic in three parts, but it must be seen in its entirety, in one go. It is a pilgrimage that must not be interrupted.

Q. 3. Read the following passage carefully and answer the questions given at the end. (20)

In its response to 9/11, America has shown itself to be not only a hyperpower but increasingly assertive and ready to use its dominance as a hyperpower. After declaring a War on Terrorism, America has led two conventional wars, in Afghanistan and Iraq, demonstrating its overwhelmingly awesome military might. But these campaigns reveal something more: America's willingness to have recourse to arms as appropriate and legitimate means to secure its interests and bolster its security. It has set forth a new doctrine: the right of pre-emptive strike when it considers its security, and therefore its national interests, to be at risk. The essence of this doctrine is the real meaning of hyperpower.

Prime Minister Tony Blair has consistently argued that the only option in the face of hyperpower is to offer wise counsel. But increasingly this is a course that governments and people across the world have refused. The mobilisation for war against Iraq split the United Nations and provoked the largest anti-war demonstrations the world has ever seen. And through it all, America maintained its determination to wage war alone if necessary and not to be counselled by the concerns of supposedly allied governments when they faithfully represented the wishes of their electorates. Rather than engaging in debate, the American government expressed its exasperation. The influential new breed of neoconservative radio and television hosts went much further. They acted as ringmasters for outpourings of public scorn that saw French fries renamed 'freedom fries' and moves to boycott French and German produce across America. If one sound-bite can capture a mood, then perhaps it would be Fox News' Bill O'Reilly. At the height of the tension over a second Security Council resolution to legitimate war in Iraq, Mr O'Reilly told his viewers that the bottom line was security, the security of his family, and in that matter 'There's no moral equivalence between the US and Belgium'. It is, in effect, the ethos of hyperpower articulated and made manifest in the public domain of 24-hour talk. And America's willingness to prosecute war has raised innumerable questions about how it engages with other countries. Afghanistan has seen the removal of the Taliban. But there are no official statistics on the number of innocent civilians dead and injured to achieve that security objective. The people of Afghanistan have witnessed a descent into the chaos that preceded the arrival of the Taliban, a country administered not by a new era of democracy under the tutelage of the hyperpower, but merely by the return of the warlords. Beyond Kabul, much of the country remains too insecure for any meaningful efforts at reconstruction and there is enormous difficulty in bringing relief aid to the rural population.

ENGLISH (PRECIS & COMPOSITION)

Questions:

(4 marks each)

1. Why does the doctrine of power set by neo-imperial America deny space to counselling?
2. What is the essence of 'moral equivalence' whereas War has no moral justification?
3. Why do countries occupied and under the tutelage of hyperepower have no peace?
4. Arguably Europe and hyperpower US are at cross purposes over the concept of war. Are they? Why?
5. What Tony Blair's meant by 'wise counsel', and did it prevail?

Q. 4. Correct only FIVE of the following:

(10)

- (i) They were lying in the sun.
- (ii) He will not come without he is asked.
- (iii) John as well as Harry bear witness to it.
- (iv) The crew was now on board and they soon busied themselves in preparing to meet the coming storm.
- (v) Could I have piece of please?
- (vi) Is there a sport club near by?
- (vii) The coat is quite big.
- (viii) It's only a short travel by train.

Q. 5. (a) Punctuate the following text, where necessary.

(05)

That familiarity produces neglect has been long observed. the effect of all external objects however great or splendid ceases with their novelty the courtier stands without emotion in the royal presence the music tramples under his foot the beauties of the spring with little attention to their fragrance and the inhabitant of the coast darts his eye upon the immense diffusion of waters without awe wonder or terror.

(b) Re-write the following sentences (ONLY FIVE) after filling in the blanks with appropriate Prepositions.

(05)

- (i) The knavish wolf was able _____ convince the pig to let him _____ his home.
- (ii) I looked this word _____ in the dictionary, but I still don't understand it.
- (iii) I need to learn these verbs _____ heart _____ tomorrow.
- (iv) The morgue is redolent _____ the odor of deceased individuals.
- (v) He is cogitating _____ some means of revenge.
- (vi) He was reticent _____ do anything about the problem.
- (vii) His body is impervious _____ moisture.
- (viii) Ahmad applied _____ the bank for a loan.

Q. 6. Use only FIVE of the pairs of words in sentences clearly illustrating their meanings.

(10)

- | | |
|------------------------------|-----------------------------|
| (i) Gibe, Jibe | (ii) Epigram, Epigraph |
| (iii) Brawl, Bawl | (iv) Crib, Crypt |
| (v) Barmy, Balmy | (vi) Peat, Petite |
| (vii) Monogamous, Monogenous | (viii) Postilion, Posterior |

Q. 7. Translate the following into English by keeping in view figurative/idiomatic expressions.

(10)

استعارت پسند انگریزی اقدار کے سامنے خوش آمدان اور فرمانبردارانہ طرز عمل کے برخلاف، جسے برطانوی سرکاروں نے فروغ دیا تھا اور جسے اہل ہند نے اس دور میں اختیار کر رکھا تھا۔ سید احمد خاں اور ان کے اعلیٰ مرتبت اور روشن دماغ فرزند سید محمود دونوں نے ایسا رویہ اختیار کرنے کی کوشش کی کہ انگریزوں کے مساوی اور ہم مرتبہ ہوں۔ سن ۱۸۶۷ء کے آکر وہ دربار کا واقعہ نہ صرف مسلمانوں کو بلکہ پوری ہندوستانی قوم کو بخوبی معلوم تھا۔ سید احمد خاں نے اس دور پر اس لیے طبع کی اختیار کی تھی کہ وہاں ہندوستانیوں کو انگریزوں کے مقابلے میں کم تر درجے کی نشست فراہم کی گئی تھی۔ اس دور میں سید احمد خاں کو ایک تحفہ عطا کیا جانے والا تھا۔ بعد میں میرٹھ کے کمشنر و پلیس کو یہ خدمت تفویض کی گئی کہ وہ اعلیٰ گزادہ سید اشیش بابر سید احمد خاں کو تحفہ پیش کریں۔

CSS General Science and Ability 2021 Past Paper

This is CSS General Science and Ability 2021 Past Paper. This GSA Past paper of 2021 was conducted by FPSC.

CSS GSA Paper Part-II Page-1

PART - II
(SECTION - A)

- (a) Differentiate between a star and a planet. What is the magnitude of a star and how the color of stars is correlated with their temperatures? (5)
- (b) "Semiconductors are the Brains of Modern Electronics". Explain in detail what this quotation means. (5)
- (c) Briefly describe the most popular and accepted theory about the origin of the Universe. (5)
- (d) What are the advantages and limitations of renewable energy resources? Briefly explain the prospects of non-conventional energy resources in Pakistan. (5)(20)

- (a) Explain with examples the relationship between cells, tissues and organs. (5)
- (b) Explain the differences in structure & function between a cell wall and a cell membrane. (5)
- (c) What is meant by transpiration? Explain in detail the significance of leaf structure in the process of transpiration. (5)
- (d) What is meant by the term double circulation? Briefly describe how the heart is adapted to keep blood flowing in a double circulation. (5)(20)

- (a) What is the sequence of strata of atmosphere and on what factors does it depends? (5)
- (b) Describe water cycle and briefly explain the major processes involved in water cycle? (5)
- (c) What is the Difference between asthenosphere and lithosphere? Explain various components of lithosphere. (5)
- (d) Differentiate between food contaminants and food adulterants. (5)(20)

- (a) Define the term "malnutrition". Elaborate its major causes and consequences. (5)
- (b) Explain how a slice of bread after few days decomposes due to the growth of fungi. (5)
- (c) What is a computer memory? Describe its units and discuss various types of memories. (5)
- (d) Differentiate between natural and artificial satellites. Briefly describe the working of communication satellites with some applications. (5)(20)

(SECTION - B)

- a) A man is now 3 times as old as his son. In ten (10) years time, the sum of their ages will be 76. How old was the man when his son was born? (5)
- b) How many tiles of 20cm^2 will be required to have a footpath 1m wide carried around the outside of grassy plot 24m long and 14m broad? (5)
- c) Mr. Faheem has dinner with his family at a restaurant which offers a 10% discount on food. The marked price of the food that they order was Rs.15000/-. Given that there was a service charges of 10% and GST is 17%, calculate the total amount of money he has to pay. (5)
- d) Mr. Khawaja walked for 45 minutes at the rate of 3km/h and then ran for half an hour at a certain speed. At the end of that time he was 6km away from the starting point. How fast did he run? (5)



CSS General Science and Ability 2021 Past Paper

CSS GSA Paper Part-II Page-2

GENERAL KNOWLEDGE-I (GENERAL SCIENCE & ABILITY)


- Q. 7 (a) A child went 90m towards East, and then he turned Right and went 20m. Subsequently he turned Right and after going 30m he reached his uncle's house. From there he went 100m to his North. Determine how far he is from his starting point. (5)
- (b) The average of 11 numbers is 63, that of the first 6 numbers are 60 and that of the last 6 numbers are 65. Find the 6th number. (5)
- (c) The following table shows some values of 'x' and the corresponding values of 'y' where, $y = x^3 - 3x - 10$. (5)

| | | | | | | | | |
|---|-----|----|----|-----|---|---|---|----|
| x | -3 | -2 | -1 | 0 | 1 | 2 | 3 | 4 |
| y | -28 | | | -10 | | | 8 | 42 |

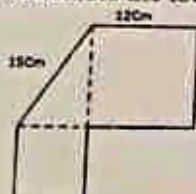
Complete the table and draw a graph between 'x' and 'y' to find the value of 'y' when $x=1.8$ and value of 'x' when $y=10$.

- (d) Mr. Raheel invests Rs.60000/- in an account that earns simple interest. At the end of 5 years, the investment is worth Rs.85000/-. Calculate the rate of simple interest per year. (5)(20)

- Q. 8. (a) Find out the correct word from the given jumbled spellings. (5)
- (i) UORSEIS (ii) REGAHT (iii) TYLEAL (iv) RAMYR (v) RYUHR
- (b) Find the number of triangles in the following two images. (5)



- (c) Calculate the total area and perimeter of the given shape. (5)



- (d) Find the missing numbers in the given series. (5)(20)
- (i) 4, 18, ?, 100, 180, 294 (ii) 15, 31, 63, 127, ? (iii) 1, 8, 27, 64, 125, ?
- (iv) 132, 156, ?, 210, 240, (v) 8, 24, 12, 36, 18, 54, ?



CSS Current Affairs 2021 Past Paper

This is CSS Current Affairs 2021 Past Paper. This CA CSS Past paper of 2021 was conducted by FPSC.

(CURRENT AFFAIRS)

| | | |
|---|---------------|--------------------|
| TIME ALLOWED: THREE HOURS | PART-I (MCQS) | MAXIMUM MARKS = 20 |
| PART-I (MCQS): MAXIMUM 30 MINUTES | PART-II | MAXIMUM MARKS = 80 |
| NOTE: (i) Part-II is to be attempted on the separate Answer Book. (ii) Attempt ONLY FOUR questions from PART-II. ALL questions carry EQUAL marks. (iii) All the parts (if any) of each Question must be attempted at one place instead of at different places. (iv) Write Q. No. in the Answer Book in accordance with Q. No. in the Q.Paper. (v) No Page/Space be left blank between the answers. All the blank pages of Answer Book must be crossed. (vi) Extra attempt of any question or any part of the question will not be considered. | | |

PART-II

- Q. No. 2. What will be the strategic and political implications of the US withdrawal from the Open Skies Treaty, and how is it impacting the arms control arrangements between the great powers? (20)
- Q. No. 3. What are the similarities and differences between Nagorno-Kaharabakh and Kashmir conflicts? (20)
- Q. No. 4. Last two decades have seen the rise of the right as a potent challenge to the liberal democracies throughout the world. What are the causes of this rise and how can states attend to this challenge? (20)
- Q. No. 5. Most of the major political parties have committed to the creation of the new provinces in Pakistan. Should new provinces be created or not, in Pakistan? Elaborate your answer by giving references from the new provinces debate. (20)
- No. 6. Some scholars term Afghan Peace Deal as the US Withdrawal Deal. Do you agree? Answer the question while discussing the contours of the Afghan peace process. (20)
- Q. No. 7. How is militarization of Artificial Intelligence and Computing revolutionizing the military affairs? (20)
- Q. No. 8. Delineate the ways in which Covid-19 has affected the contours of the contemporary world order. (20)

CSS Pakistan Affairs 2021 Past Paper

This is CSS Pakistan Affairs 2021 Past Paper. This PA CSS Past paper of 2021 was conducted by FPSC.



FEDERAL PUBLIC SERVICE COMMISSION
COMPETITIVE EXAMINATION-2021
FOR RECRUITMENT TO POSTS IN BS-17
UNDER THE FEDERAL GOVERNMENT
GENERAL KNOWLEDGE-III
(PAKISTAN AFFAIRS)

Roll Number

TIME ALLOWED: THREE HOURS
PART-I(MCQS): MAXIMUM 30 MINUTES

PART-I (MCQS)
PART-II

MAXIMUM MARKS = 20
MAXIMUM MARKS = 80

- NOTE:** (i) **Part-II** is to be attempted on the separate **Answer Book**.
(ii) Attempt **ONLY FOUR** questions from **PART-II**. ALL questions carry **EQUAL** marks.
(iii) All the parts (if any) of each Question must be attempted at one place instead of at different places.
(iv) Write Q. No. in the Answer Book in accordance with Q. No. in the Q.Paper.
(v) No Page/Space be left blank between the answers. All the blank pages of Answer Book must be crossed.
(vi) Extra attempt of any question or any part of the question will not be considered.

PART-II

- Q. No. 2. Enumerate the measures adopted by Pakistan to spotlight on the plight of Kashmiri people in the Indian occupied Jammu and Kashmir after 5th August 2019. (20)
- Q. No. 3. Explain "Afghans' owned, Afghans' led" solution of Afghanistan crisis. (20)
- Q. No. 4. ✓ How CPEC phase II will galvanize industrialization and employment in Pakistan? (20)
- Q. No. 5. ✓ Discuss the significance of renewable energy resources for Pakistan. (20)
- Q. No. 6. How Pakistan should combat 5th generation war successfully? (20)
- Q. No. 7. ✓ "Political Stability is mandatory for economic prosperity in Pakistan". Elaborate. (20)
- Q. No. 8. Critically evaluate the evolution of Muslim Separate identity in the Subcontinent. (20)

↓
ideology
of
Pakistan

China Pak Economic Corridor

Consumerism



CSS Pakistan Affairs 2021 Past Paper

CSS Islamic Studies (Islamiyat) 2021 Past Paper

This is CSS English Essay 2021 Past Paper. This English Essay CSS Past paper of 2021 was conducted by FPSC.

FEDERAL PUBLIC SERVICE COMMISSION
COMPETITIVE EXAMINATION - 2021
FOR RECRUITMENT TO POSTS IN BS-17
UNDER THE FEDERAL GOVERNMENT

ISLAMIC STUDIES

Roll Number

| | | |
|----------------------------------|---------------|--------------------|
| TIME ALLOWED: THREE HOURS | PART-I (MCQS) | MAXIMUM MARKS = 20 |
| PART-I(MCQS): MAXIMUM 30 MINUTES | PART-II | MAXIMUM MARKS = 80 |

NOTE: (i) Part-II is to be attempted on the separate Answer Book.
(ii) Attempt ONLY FOUR questions from PART-II. ALL questions carry EQUAL marks.
(iii) All the parts (if any) of each Question must be attempted at one place instead of at different places.
(iv) Write Q. No. in the Answer Book in accordance with Q. No. in the Q.Paper.
(v) No Page/Space be left blank between the answers. All the blank pages of Answer Book must be crossed.
(vi) Extra attempt of any question or any part of the question will not be considered.

PART-II

Q. No. 2. What is belief in the Day of Judgment? Explore its effects on individual and collective lives of human beings. (20)

Q. No. 3. Islam provides better rights to men and women than all other religions. Explore with arguments. (20)

Q. No. 4. Comment on the teachings of Islam regarding co-existence in a multi-faith society. (20)

Q. No. 5. Islamophobia is a sign of extremism. Give suggestions for its remedy. (20)

Q. No. 6. Express the principles of accountability of rulers according to the Holy Quarn and Sunnah. (20)

Q. No. 7. Explore the importance of Sufism to spread out Islam. Is the amelioration of current deviation possible through Sufism? (20)

Q. No. 8. Write notes on the following: (10 marks each) (20)

(a) Treaty of Hdaybiyya as a pact of peace.

(b) Benefits acquired from Battle of Khayber.

URDU VERSION

(20) سوال نمبر 2: عقیدہ آخرت کی وضاحت کریں۔ اس کے انسانوں کی انفرادی و اجتماعی زندگی پر اثرات کا جائزہ لیں۔

(20) سوال نمبر 3: اسلام مرد و خواتین کو تمام مذاہب سے بہتر حقوق مہیا کرتا ہے۔ دلائل سے ثابت کریں۔

(20) سوال نمبر 4: کثیر المذہبی معاشرے میں ہٹائے باہمی کی اسلامی تعلیمات کا خلاصہ پیش کریں۔

(20) سوال نمبر 5: اسلاموفوبیا انتہا پسندی کی علامت ہے اس کے تدارک کے لیے تجاویز پیش کریں۔

(20) سوال نمبر 6: اسلام نے حکمرانوں کے احتساب کے جو اصول وضع کیے ہیں قرآن و سنت کی روشنی میں بیان کریں

(20) سوال نمبر 7: فروغ اسلام میں تصوف کی اہمیت بیان کریں، کیا موجودہ بے راہروی کا علاج تصوف میں ممکن ہے؟

(20) سوال نمبر 8: درج ذیل پر نوٹ لکھیں۔ (10 marks each)

(a) صلح حدیبیہ، بحیثیت معاہدہ امن۔

(b) غزوہ خیبر سے حاصل ہونے والے فوائد۔

CSS Islamic Studies (Islamiyat) 2021 Past Paper

CSS Compulsory Subject MCQs

- [English \(Precis and Composition\)](#)
- [Current Affairs MCQs](#)
- [Pakistan Affairs MCQs](#)
- [General Science & Ability MCQs](#)
- [Islamic Studies MCQs](#)

CSS Optional Subject MCQs

◦ **Group-I**

- [Accountancy & Auditing MCQs](#)
 - [Economics MCQs](#)
 - [Computer Mcqs](#)
 - [Political Science MCQs](#)
 - [International Relations Mcqs](#)
-

◦ **Group-II**

- [Physics Mcqs](#)
 - [Chemistry Mcqs](#)
 - [Mathematics MCQs](#)
 - [Geology MCQs](#)
 - [Statistics MCQs](#)
-

◦ **Group-III**

- [Public Administration MCQs](#)

- [Business Administration MCQs](#)
 - [Governance & Public Policies MCQs](#)
 - [Town Planning & Urban Management](#)
-

◦ **[Group-IV](#)**

- [History of Pakistan & India MCQs](#)
 - [Islamic History & Culture](#)
 - [British History MCQs](#)
 - [European History MCQs](#)
 - [History of USA Mcqs](#)
-

◦ **[Group-V](#)**

- [Gender Studies MCQs](#)
- [Environmental Science MCQs](#)
- [Agriculture & Forestry MCQs](#)
- [Zoology MCQs](#)
- [Botany MCQs](#)
- [English Literature MCQs](#)
- [Urdu Literature MCQs](#)

◦ **Group-VI**

- [Law MCQs](#)
 - [Constitutional Law MCQs](#)
 - [International Law MCQs](#)
 - [Muslim Law & Jurisprudence MCQs](#)
 - [Mercantile Law MCQs](#)
 - [Criminology MCQs](#)
 - [Philosophy MCQs](#)
-

◦ **Group-VII**

- [Journalism & Mass Communication MCQs](#)
 - [Psychology MCQs](#)
 - [Geography MCQs](#)
 - [Sociology MCQs](#)
 - [Anthropology MCQs](#)
-

[CSS Languages MCQs](#)

- [Arabic MCQs](#)
- [Balochi MCQs](#)
- [Sindhi MCQs](#)
- [Punjabi MCQs](#)
- [Pashto MCQs](#)
- [Persian MCQs](#)

Consider linking to these Pages of CSS MCQs Past Papers:

- [100 Top Most Important English Idioms For CSS and PMS Exams](#)
- [CSS Current Affairs Paper 2021 |FPSC CSS PAST PAPERS OF CSS 2021](#)
- [Please turn left at the traffic lights.](#)
- [ISLAMIC STUDIES MCQS QUIZ](#)
- [CSS Past Papers MCQs with answers pdf 2021](#)
- [How many censuses have been held in Pakistan since 1947?](#)
- [I wish I _____ harder](#)
- [CSS 2015 Pakistan Affairs Paper Solved MCQs Quiz](#)
- [CSS 2016 Pakistan Affairs Paper Solved MCQs Quiz](#)
- [CSS Optional Subjects MCQs](#)

[Click below to Download in PDF now CSS Past Papers 2021](#)
